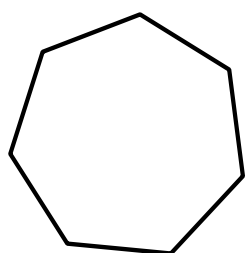
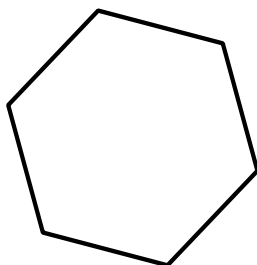
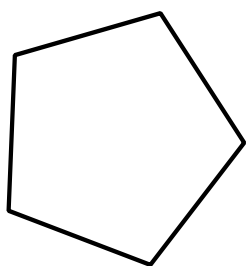
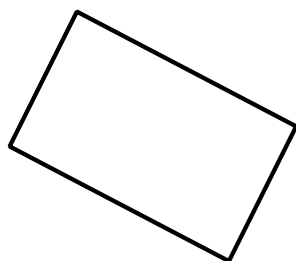
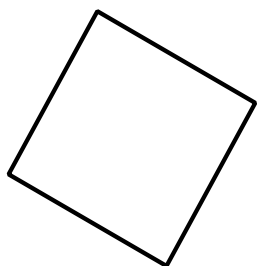



[۱۸] ریاضی هشتم

نام:

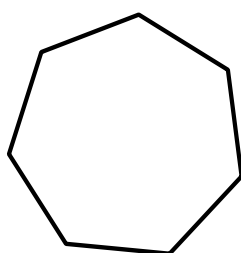
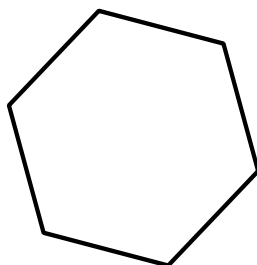
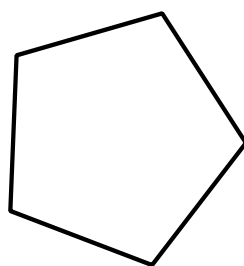
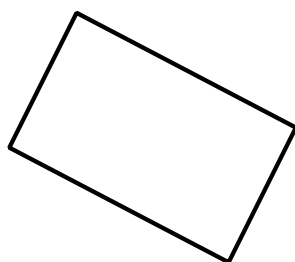
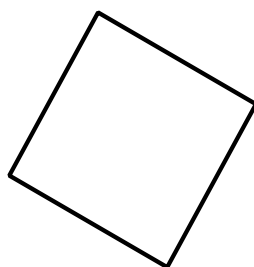

۱. بررسی کنید که مرکز تقارن دارد یا نه.



[۱۸] ریاضی هشتم

نام:

۱. بررسی کنید که مرکز تقارن دارد یا نه.



[۱۸] ریاضی هشتم

نام:

۱. بررسی کنید که مرکز تقارن دارد یا نه.

